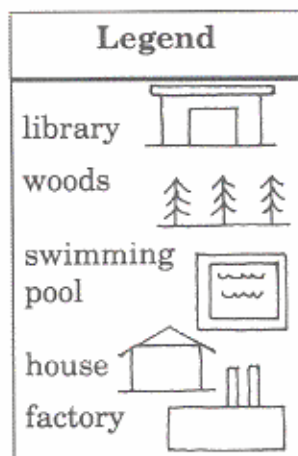
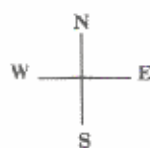
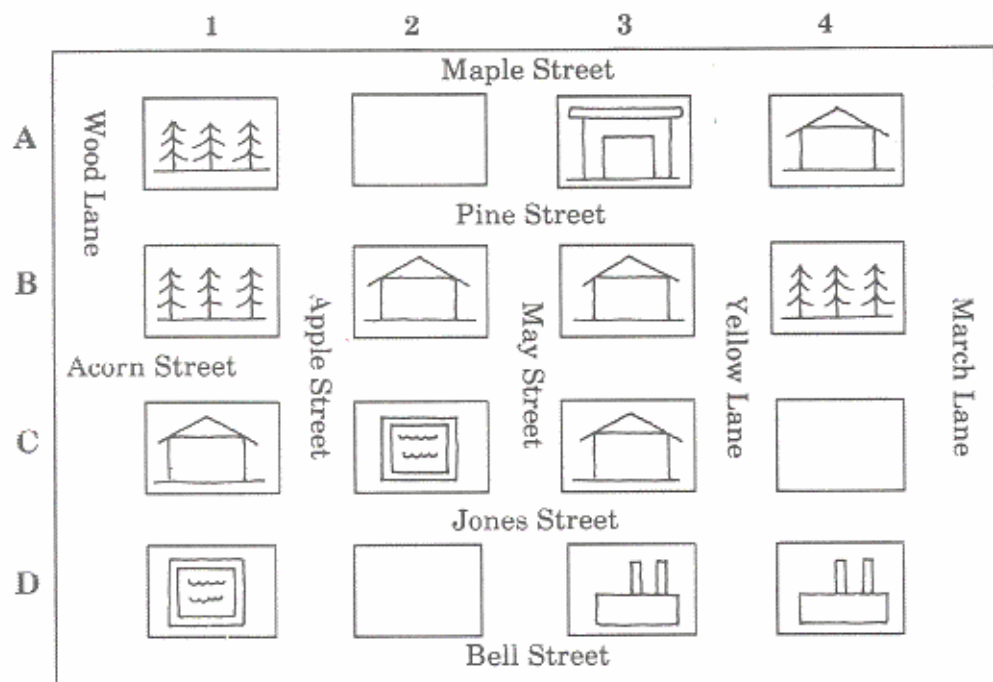


# Numbers and Letters on a Map

Name \_\_\_\_\_

This is a map of Red Falls. Use the numbers and letters to help you answer the questions.



- Locate these blocks. Write down what you see in each block.  
 "A 1" \_\_\_\_\_ "C 1" \_\_\_\_\_  
 "D 4" \_\_\_\_\_ "D 1" \_\_\_\_\_  
 "B 2" \_\_\_\_\_ "A 3" \_\_\_\_\_
- Name the blocks with swimming pools. \_\_\_\_\_
- Name the blocks with houses. \_\_\_\_\_
- Name the blocks with woods. \_\_\_\_\_
- Tell what is located in the first block south of "A 3." \_\_\_\_\_
- What is in the block south of "C 1"? \_\_\_\_\_
- How many houses are in "B 2"? \_\_\_\_\_
- How many houses altogether are in the "C" blocks? \_\_\_\_\_
- What is in the block east of "B 3"? \_\_\_\_\_
- What is in the block west of "D 4"? \_\_\_\_\_
- Draw a swimming pool in "A 2."
- Draw a house in "D 2."
- Draw a factory in "C 4."