


What Do Hikers See?

Name _____



Follow the directions to complete this area map.

1. Draw a



west of the



2. Draw 6



south of the



3. Draw an



in the middle of the



4. Draw 10



south of the



5. Draw a



between the



and



6. Draw 2



on the east side of the



7. Draw 2



south of the 6



8. Draw 3

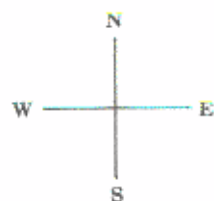
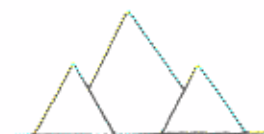


south of the



What Do Hikers See?

Name _____



Follow the directions to complete this area map.

1. Draw a



west of the



2. Draw 6



south of the



3. Draw an



in the middle of the



4. Draw 10



south of the



5. Draw a



between the



and



6. Draw 2



on the east side of the



7. Draw 2



south of the 6



8. Draw 3



south of the

