





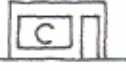











# Cartographers Use Symbols

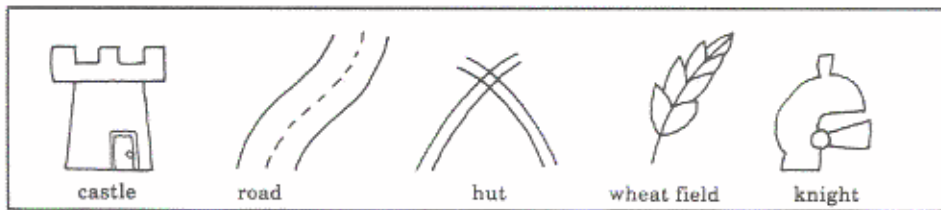
Name \_\_\_\_\_

On another sheet of paper, draw a map using the symbols and directions given below.



1. Draw a compass rose in the lower right-hand corner of the page.
2. Draw a  in the center of your paper from west to east.
3. Draw 6  in the southwest corner of the map.
4. Draw 4  east of the .
5. Draw a  northeast of the .
6. Draw a  west of the .
7. Draw a  northwest of the .
8. Draw a  north of the .
9. Draw a  east of the .
10. Draw a  north of the .

On another sheet of paper, draw another map by using the symbols and directions given below.



1. Draw a compass rose in the lower right-hand corner of the page.
2. Draw a castle in the center of the page.
3. Draw a road from the castle door southeast to the bottom of the page.
4. Draw 4 huts west of the castle.
5. Draw a knight on the east and west sides of the castle door.
6. Draw a wheatfield east of the castle.
7. Draw a road east from the huts to the castle road.